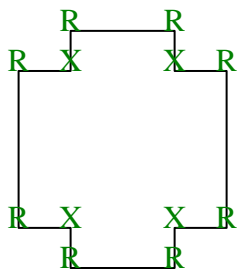


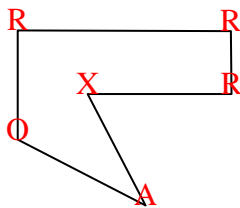


Count the number of Acute, Obtuse, Right and Reflex angles in each shape.

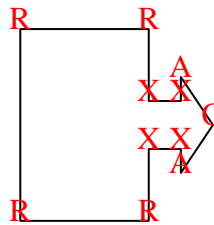
Ex)



1)



2)



Answers

Ex. 0 0 8 4

1. 1 1 3 1

2. 2 1 4 4

3. 2 4 4 0

4. 3 0 0 0

5. 0 3 2 0

6. 0 0 8 4

7. 2 2 1 1

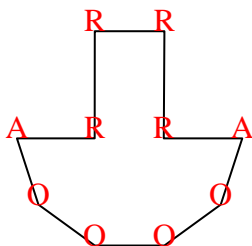
8. 0 8 0 0

9. 1 2 1 0

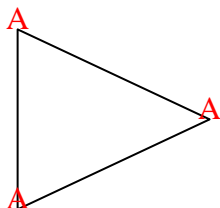
10. 2 3 0 1

11. 2 2 1 2

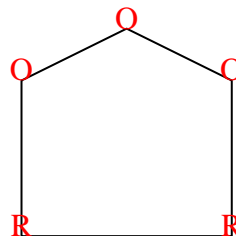
3)



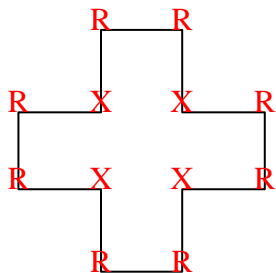
4)



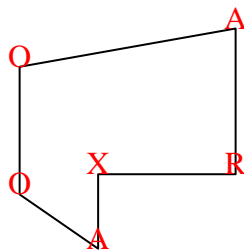
5)



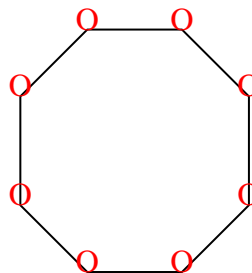
6)



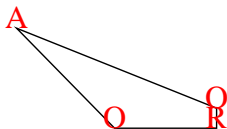
7)



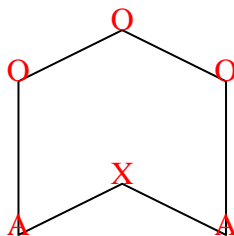
8)



9)



10)



11)

